

**TOP  
TRUMPS**

*PLAY AND LEARN*

**YEAR 3**

**MATHS**

Balinese



TOP  
TRUMPS  
PLAYBOARDS

Size	2 + 1	
Cuteness	6 x 3	
Rarity	4 x 2	
TT Rating	20 x 4	

Egyptian  
Mau



TOP  
TRUMPS  
PLAYBOARDS

Size	9 - 6	
Cuteness	12 x 2	
Rarity	14 - 7	
TT Rating	44 x 2	

Ragamuffin



TOP  
TRUMPS  
PLAYBOARDS

Size	15 - 10	
Cuteness	35 - 8	
Rarity	2 x 3	
TT Rating	42 x 2	

Scottish  
Fold



TOP  
TRUMPS  
PLAYBOARDS

Size	1 x 1	
Cuteness	40 - 11	
Rarity	4 x 2	
TT Rating	85 + 6	

Singapura



TOP  
TRUMPS  
PLAYBOARDS

Size	20 - 19	
Cuteness	4 x 3	
Rarity	20 - 13	
TT Rating	8 x 10	

Devon  
Rex



TOP  
TRUMPS  
PLAYBOARDS

Size	8 - 6	
Cuteness	2 x 10	
Rarity	7 x 2	
TT Rating	90 - 7	

Japanese  
Bobtail



TOP  
TRUMPS  
PLAYTHINGS

Size	20 – 17	
Cuteness	21 + 7	
Rarity	4 x 2	
TT Rating	9 x 10	

Manx



TOP  
TRUMPS  
PLAYTHINGS

Size	12 – 8	
Cuteness	8 x 3	
Rarity	3 x 3	
TT Rating	72 + 6	

Ragdoll



TOP  
TRUMPS  
PLAYTHINGS

Size	18 – 14	
Cuteness	11 x 2	
Rarity	14 - 9	
TT Rating	8 x 10	

Ocicat



TOP  
TRUMPS  
PLAYTHINGS

Size	22 -18	
Cuteness	5 x 3	
Rarity	3 + 4	
TT Rating	43 + 31	

Savannah



TOP  
TRUMPS  
PLAYTHINGS

Size	10 – 7	
Cuteness	9 x 2	
Rarity	20 – 11	
TT Rating	8 x 10	

Russian  
Blue




TOP  
TRUMPS  
PLAYTHINGS


Size	20 – 18	
Cuteness	6 x 3	
Rarity	2 x 4	
TT Rating	69 + 9	




Topsy has been given **£2** to go to the shops with. If he is to buy each of the following, how much change will he have?



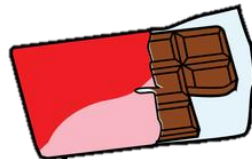
**£1.20**



**30p**




**£2**



**50p**

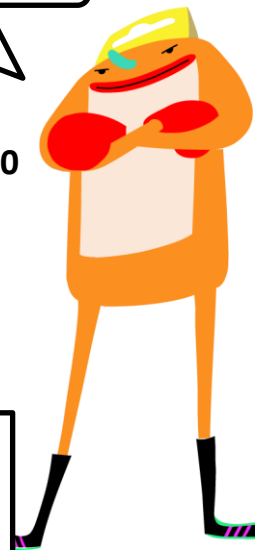


**75p**



Can you round these numbers to the nearest whole hundred?

Remember to use the number line!



280

290

180

110

130

240

150

120

250



Trumpy, what is a  
QUADRILATRAL?

It is when a shape has  
FOUR straight sides



Colour in the shapes that are a  
**QUADRILATRAL**

